

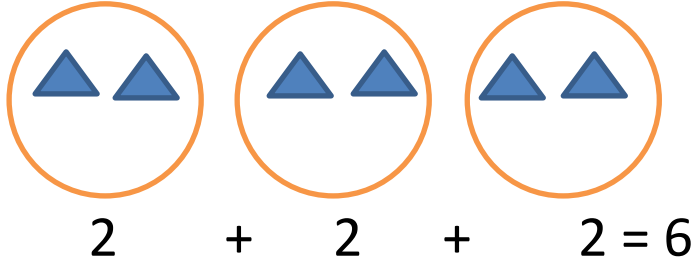


Adı-Soyadı:..... Sınıf:..... Tarih:31 Mart 2020 Salı

MATEMATİK ALIŞTIRMALAR
CEVAPLAR

1.Aşağıda boş bırakılan yerleri uygun sayılarla doldurunuz.

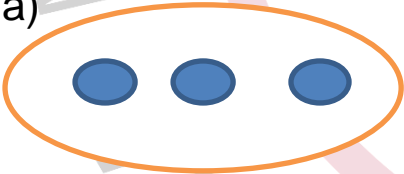
Örnek:



3 tane 2= 6 eder.

$$3 \times 2 = 6$$

a)




$$3=3$$

1 tane 3 = 3 eder.

$$1 \times 3 = 3$$

b)



$$3 + 3 = 6$$

2 tane 3 = 6 eder.

$$2 \times 3 = 6$$

c)

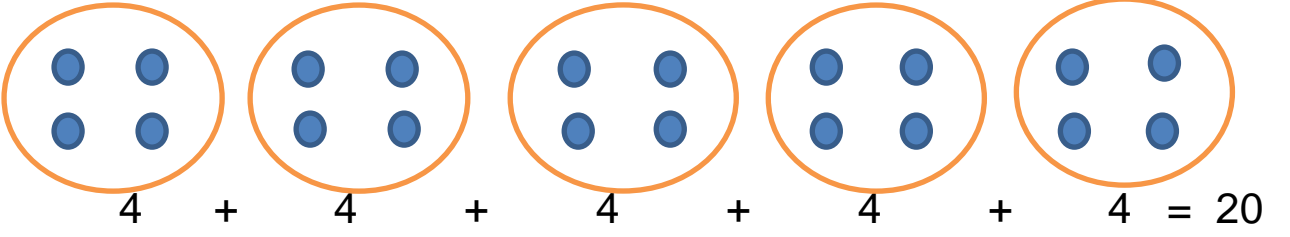


$$1 + 1 + 1 + 1 + = 4$$

4 tane 1 = 4 eder.

$$4 \times 1 = 4$$

d)

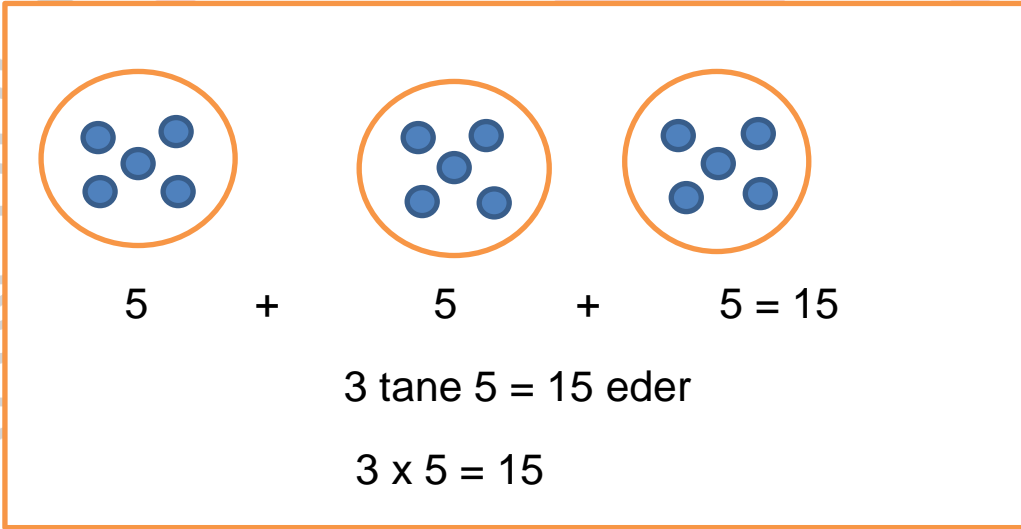


5 tane 4 = 20 eder.

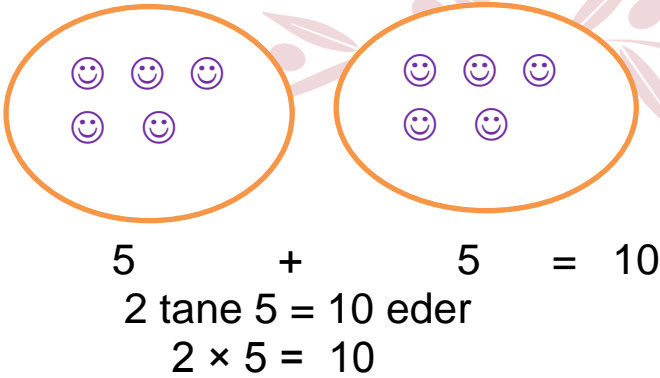
$$5 \times 4 = 20$$

2. Aşağıda verilen çarpmaları kümelerle çizerek gösteriniz.

Örnek:



a) 2 tane, 5 elemanlı küme çiziniz.



b) 4 tane, 2 elemanlı küme çiziniz.



$$2 + 2 + 2 + 2 = 8$$

4 tane 2 = 8 eder

$$4 \times 2 = 8$$

c) 5 tane, 1 elemanlı küme çiziniz.



$$1 + 1 + 1 + 1 + 1 = 5$$

5 tane 1 = 5 eder

$$5 \times 1 = 5$$

d) 1 tane, 4 elemanlı küme çiziniz.



$$4 = 4$$

1 tane 4 = 4 eder

$$1 \times 4 = 4$$



YAKIN DOĞU İLKOKULU • NEAR EAST JUNIOR COLLEGE



1996