



Yakın Doğu İlkokulu

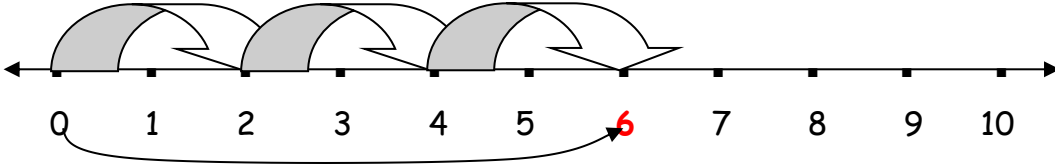
Near East Junior College

ADI SOYADI: SINIF:.....TARİH: 16.04.2020

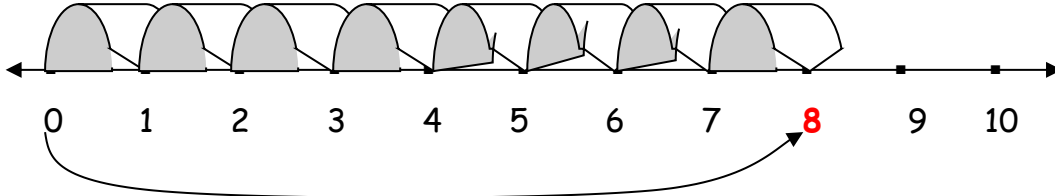
MATEMATİK ÇALIŞMA SORULARI

A)Aşağıda verilen çarpma işlemlerini sayı doğrusu üzerinde gösterelim.

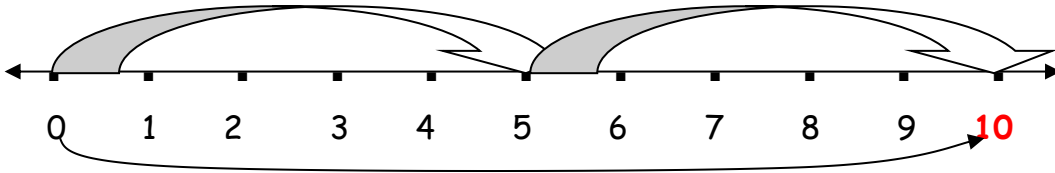
1) $3 \times 2 = 6$



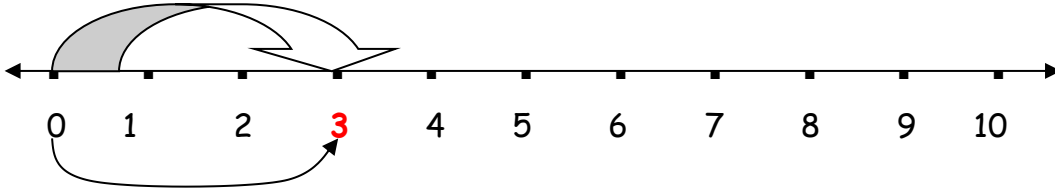
2) $8 \times 1 = 8$



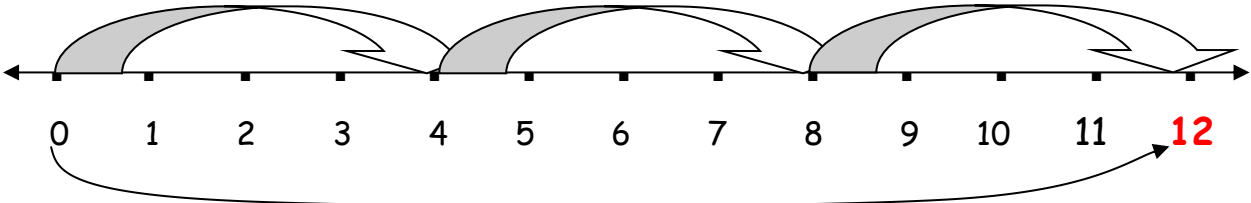
3) $2 \times 5 = 10$



4) $1 \times 3 = 3$

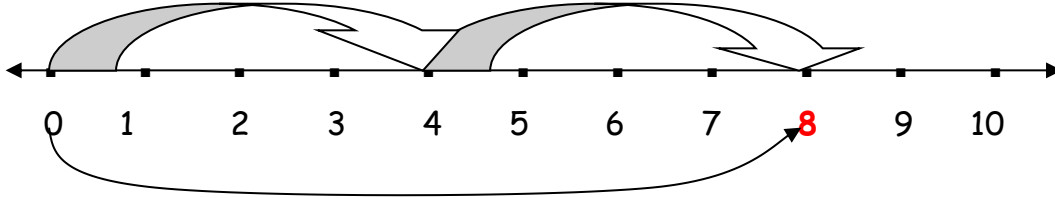


5) $3 \times 4 = 12$

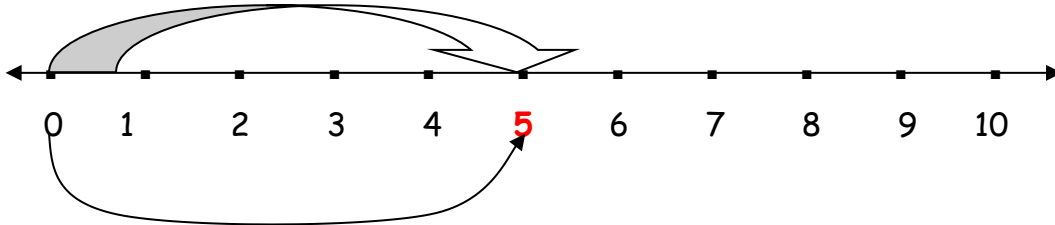


B) Sayı doğrusu üzerinde gösterilen çarpma işlemlerini bulunuz.

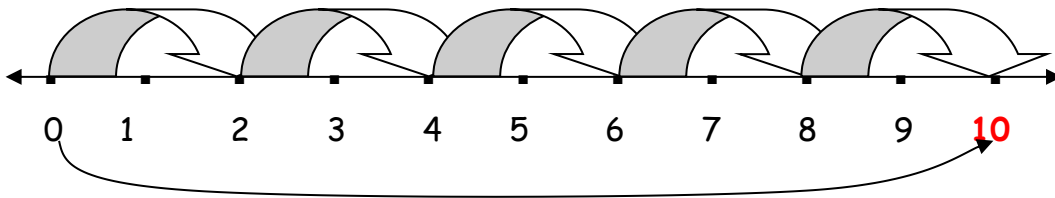
1) $2 \times 4 = 8$



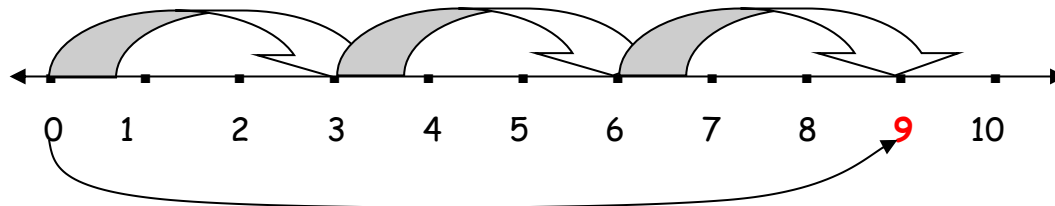
2) $1 \times 5 = 5$



3) $5 \times 2 = 10$



4) $3 \times 3 = 9$



5) $4 \times 1 = 4$

