



## MATEMATİK ÇALIŞMA SORULARININ CEVAPLARI

1) Aşağıda verilen yan yana çarpma işlemlerini yapınız.

$2 \times 5 = \dots 10 \dots$

$6 \times 4 = \dots 24 \dots$

$4 \times 3 = \dots 12 \dots$

$3 \times 10 = \dots 30 \dots$

$3 \times 3 = \dots 9 \dots$

$7 \times 2 = \dots 14 \dots$

$7 \times 4 = \dots 28 \dots$

$8 \times 1 = \dots 8 \dots$

2) Aşağıda verilen alt alta çarpma işlemlerini yapınız.

$$\begin{array}{r} 10 \\ \times 5 \\ \hline 50 \end{array}$$

$$\begin{array}{r} 2 \\ \times 8 \\ \hline 16 \end{array}$$

$$\begin{array}{r} 5 \\ \times 5 \\ \hline 25 \end{array}$$

$$\begin{array}{r} 1 \\ \times 4 \\ \hline 4 \end{array}$$

$$\begin{array}{r} 4 \\ \times 3 \\ \hline 12 \end{array}$$

$$\begin{array}{r} 3 \\ \times 1 \\ \hline 3 \end{array}$$

$$\begin{array}{r} 2 \\ \times 7 \\ \hline 14 \end{array}$$

$$\begin{array}{r} 10 \\ \times 2 \\ \hline 20 \end{array}$$

3) Aşağıda verilen toplama işlemlerini çarpma işlemi şeklinde yazınız.

a)  $4+4+4 = \dots 3 \dots \times \dots 4 \dots = \dots 12 \dots$

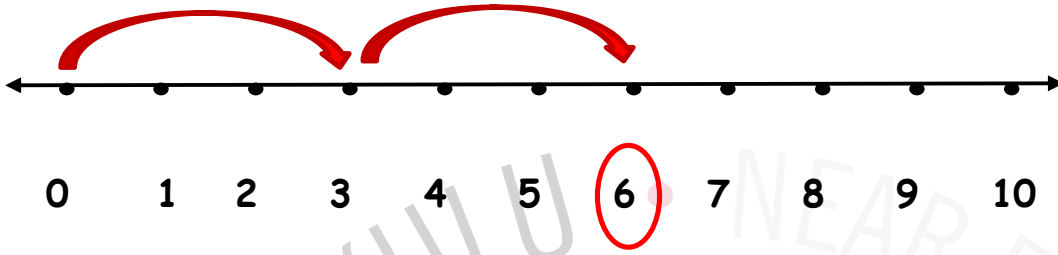
b)  $1+1+1+1+1 = \dots 5 \dots \times \dots 1 \dots = \dots 5 \dots$

c)  $2+2+2+2+2+2 = \dots 6 \dots \times \dots 2 \dots = \dots 12 \dots$

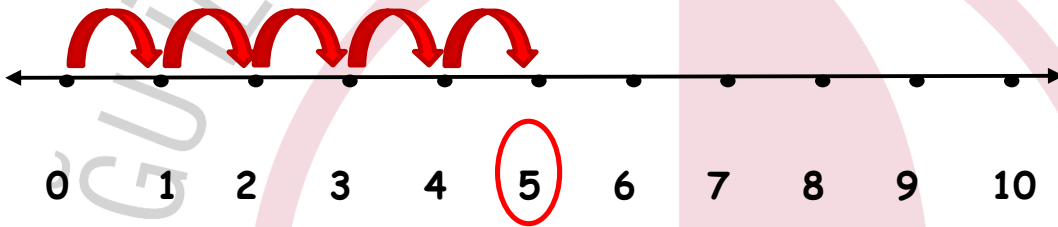
d)  $5+5 = \dots 2 \dots \times \dots 5 \dots = \dots 10 \dots$

4) Aşağıda verilen çarpma işlemlerini sayı doğrusu üzerinde gösteriniz.

a)  $2 \times 3 = \dots 6 \dots$

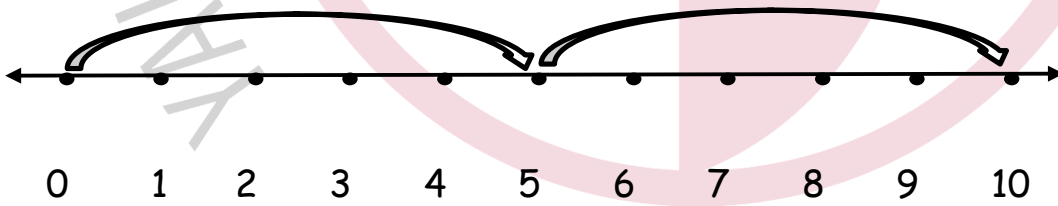


b)  $5 \times 1 = \dots 5 \dots$



5) Sayı doğrusu üzerinde gösterilen çarpma işlemlerini bulunuz.

a)  $2 \times 5 = 10$



b)  $4 \times 2 = 8$

