



1996

PRIMARY FIVE - SCIENCE WORKSHEET

2019-2020 ACADEMIC YEAR

Date: Wednesday, 29th April 2020

ANSWER KEY


MAINS ELECTRICITY

A) Write their names :

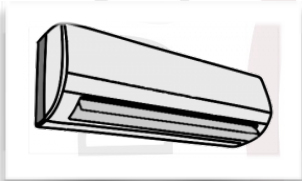
1.




power station



2.




air conditioner



3.



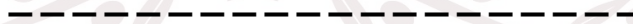
hairdryer



4.



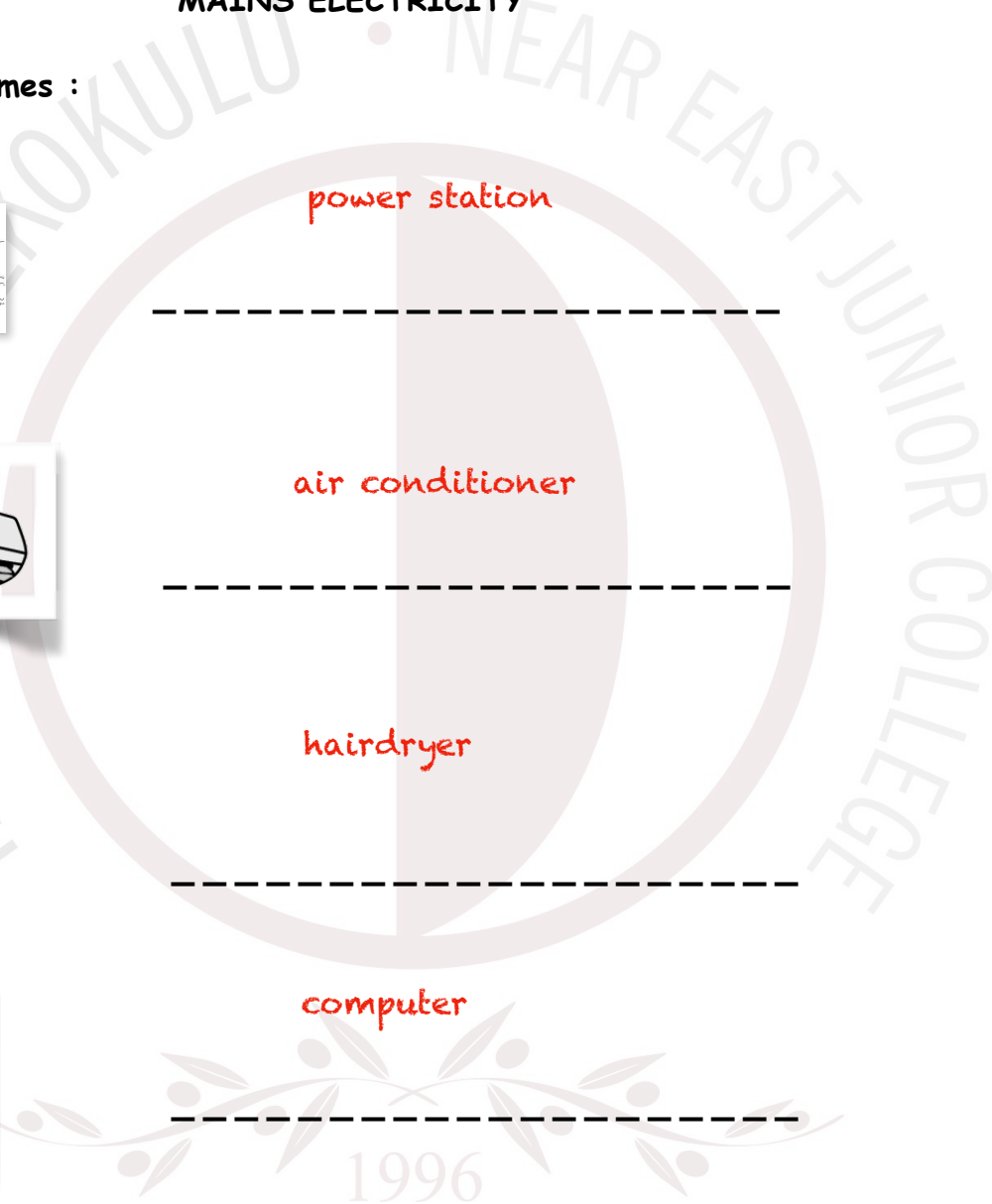
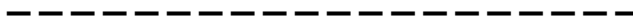
computer




5.




toaster



B) Put a cross to the appliances which don't work with electricity and put a tick to appliances which work with electricity:

1. 

2. 

3. 

4. 

5. 

6. 

7. 

8. 

9. 

10. 



C) Answer the questions:

1. What is mains electricity ?

It is the form of electrical power that is delivered to homes and businesses.

2. Where do we get our mains electricity from ?

Power stations provide us with our mains electricity.

3. What are the common uses of electricity ?

Electricity is used for lighting, heating, cooling, electric motors and electronic equipment.

4. What happens if mains electricity flows through our body ?

If mains electricity flows through your body you will get an electric shock.

5. Why can electricity pass easily through water ?

Water is conductive so electricity can pass easily through water.



