

Çarpma videosundaki (1. bölüm) alıştırmaların cevapları

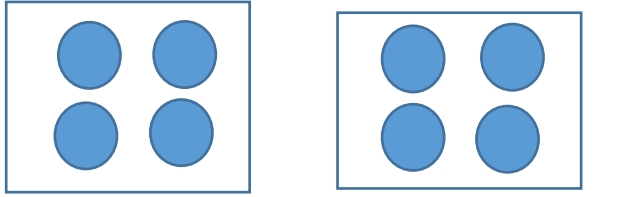
İsim :

Sınıf : 2 /

30.03.2020 Pazartesi

A. Kümelerle verilen toplama işlemlerini çarpmaya çeviriniz.

1 -

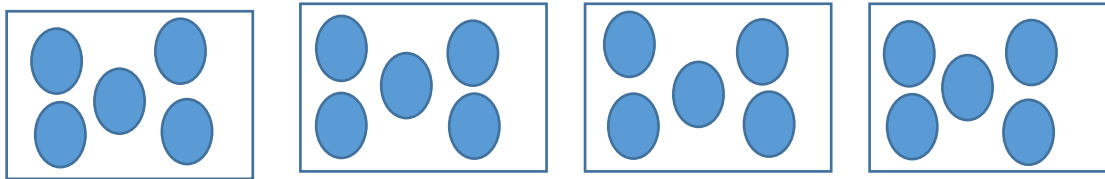


$$4 + 4 = 8$$

2 tane 4 , 8 eder.

$$2 \times 4 = 8$$

2 -

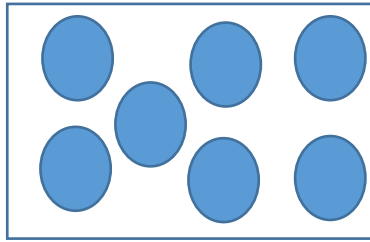


$$5 + 5 + 5 + 5 = 20$$

4 tane 5 , 20 eder.

$$4 \times 5 = 20$$

3 -

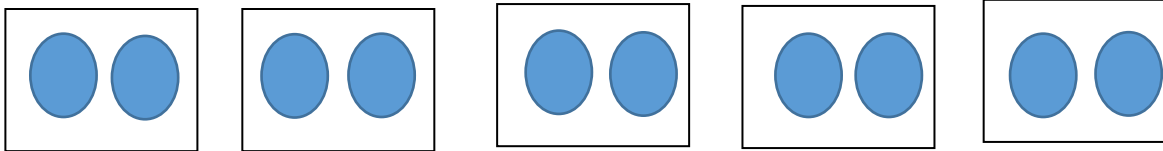


.....7.....

...1.... tane ...7.... ,7.... eder.

...1.... X ...7.... = ...7.....

4 -

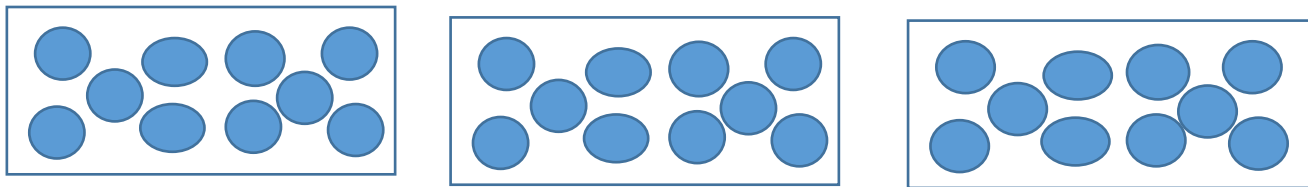


...2.... + ...2.... + ...2.... + ...2.... + ...2.... = ...10.....

...5.... tane ...2.... ,10.... eder.

...5.... X ...2.... = ...10.....

5 -



.....10..... +10..... +10..... = 30

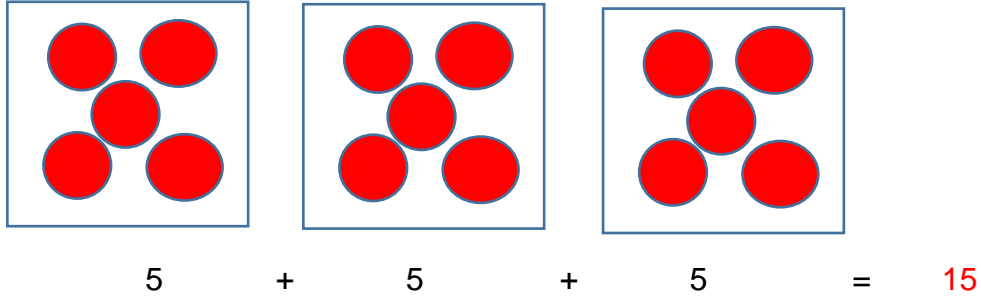
.....3.... tane10.... ,30.... eder.

.....3.. X ...10..... = ...30.....

B –Verilen Çarpma işlemlerini kümelerle yapınız.

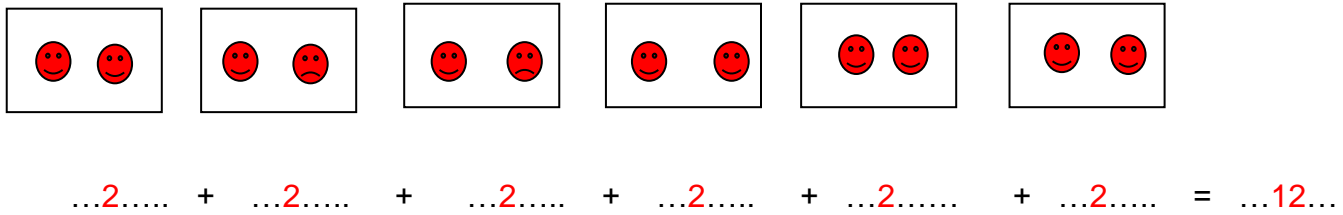
1-

$$3 \times 5 = 15$$



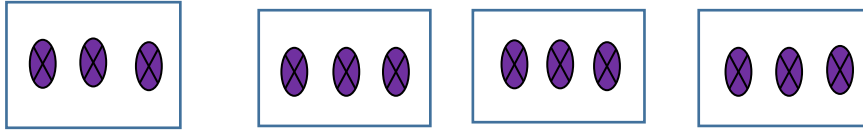
2 -

$$6 \times 2 = \dots 12 \dots$$



3-

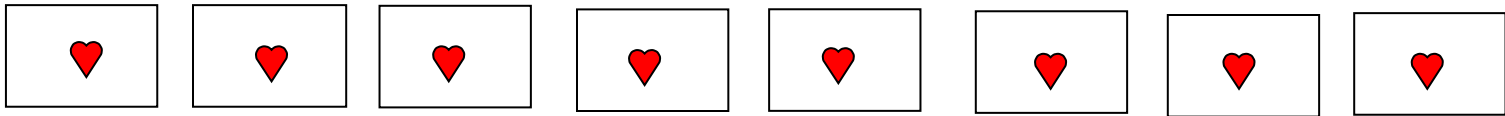
$$4 \times 3 = \dots 12 \dots$$



$$\dots 3 \dots + \dots 3 \dots + \dots 3 \dots + \dots 3 \dots = \dots 12 \dots$$

4-

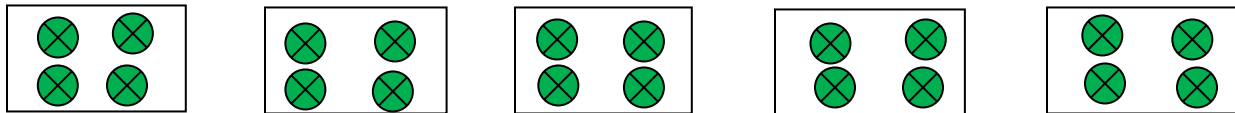
$$8 \times 1 = 8$$



$$\dots 1 \dots + \dots 1 \dots + \dots 1 \dots + \dots 1 \dots + \dots 1 \dots + \dots 1 \dots + \dots 1 \dots + \dots 1 \dots = \dots 8 \dots$$

5-

$$5 \times 4 = \dots 20 \dots$$



$$\dots 4 \dots + \dots 4 \dots + \dots 4 \dots + \dots 4 \dots + \dots 4 \dots = 20$$