

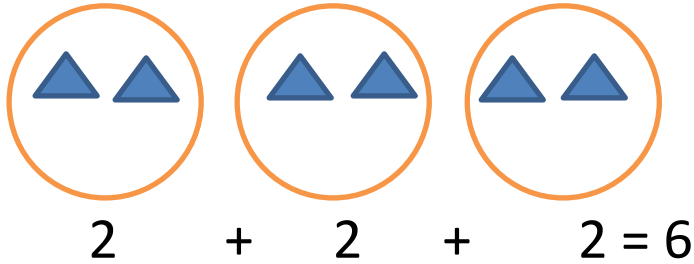


Adı-Soyadı:..... Sınıf:..... Tarih:31 Mart Salı 2020

MATEMATİK ALIŞTIRMALAR

1.Aşağıda boş bırakılan yerleri uygun sayılarla doldurunuz.

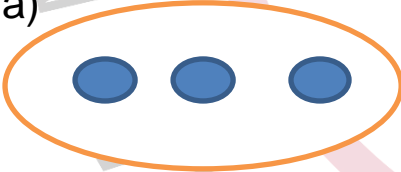
Örnek:



3 tane 2= 6 eder.

$$3 \times 2 = 6$$

a)




$$\underline{\quad} = \underline{\quad}$$

__ tane __ = __ eder.

$$\underline{\quad} \times \underline{\quad} = \underline{\quad}$$

b)



$$\underline{\quad} + \underline{\quad} = \underline{\quad}$$

__ tane __ = __ eder.

$$\underline{\quad} \times \underline{\quad} = \underline{\quad}$$

c)

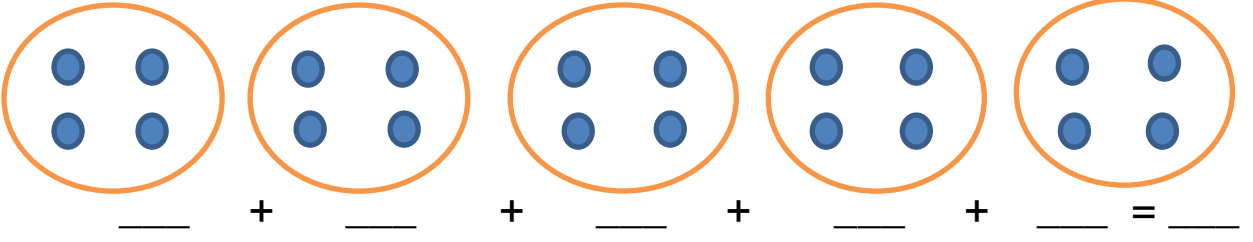


$$\underline{\quad} + \underline{\quad} + \underline{\quad} + \underline{\quad} = \underline{\quad}$$

__ tane __ = __ eder.

$$\underline{\quad} \times \underline{\quad} = \underline{\quad}$$

d)



_____ tane _____ = _____ eder.

_____ x _____ = _____

2. Aşağıda verilen çarpımları kümeler çizerek gösteriniz.

Örnek:

5 + 5 + 5 = 15

3 tane 5 = 15 eder

3 x 5 = 15

a) 2 tane, 5 elemanlı küme çiziniz.

b) 4 tane, 2 elemanlı küme çiziniz.

c) 5 tane, 1 elemanlı küme çiziniz.

d) 1 tane, 4 elemanlı küme çiziniz.

