



c)  $8 \times 4 = \dots 32 \dots$

$\dots 4 \dots + 4 \dots + 4 \dots + 4 \dots + 4 \dots + 4 \dots + 4 \dots + 4 \dots = \dots 32 \dots$

d)  $5 \times 5 = \dots 25 \dots$

$\dots 5 \dots + 5 \dots + 5 \dots + 5 \dots + 5 \dots = \dots 25 \dots$

e)  $2 \times 10 = \dots 20 \dots$

$\dots 10 \dots + 10 \dots = \dots 20 \dots$

3) Aşağıda verilen toplama ve çıkarma işlemlerini yapınız.

$$\begin{array}{r} 325 \\ - 14 \\ \hline 311 \end{array}$$

$$\begin{array}{r} 436 \\ + 26 \\ \hline 462 \end{array}$$

$$\begin{array}{r} 311 \\ - 9 \\ \hline 302 \end{array}$$

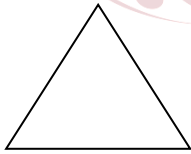
$$\begin{array}{r} 436 \\ + 19 \\ \hline 455 \end{array}$$

$$\begin{array}{r} 280 \\ - 19 \\ \hline 261 \end{array}$$


$$\begin{array}{r} 75 \\ - 44 \\ \hline 31 \end{array}$$

$$\begin{array}{r} 86 \\ + 9 \\ \hline 95 \end{array}$$


4) Aşağıda verilen geometrik şekillerin isimlerini yazınız.



Üçgen




Kare



Dikdörtgen



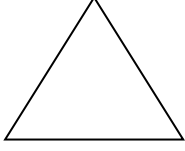
Çember



Daire

5) Aşağıda verilen geometrik şekillerin köşe ve kenar sayılarını yazınız.

a)



.....3..... köşesi ve .....3..... kenarı vardır.

b)



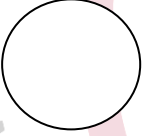
.....4..... köşesi ve .....4..... kenarı vardır.

c)




.....4..... köşesi ve .....4..... kenarı vardır.

d)



.....0..... köşesi ve .....0..... kenarı vardır.

e)



.....0..... köşesi ve .....0..... kenarı vardır.



1996