

c) $8 \times 4 = \dots$

$\dots + \dots + \dots + \dots + \dots + \dots + \dots + \dots = \dots$

d) $5 \times 5 = \dots$

$\dots + \dots + \dots + \dots + \dots = \dots$

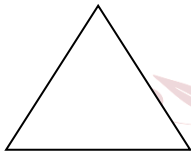
e) $2 \times 10 = \dots$

$\dots + \dots = \dots$


3) Aşağıda verilen toplama ve çıkarma işlemlerini yapınız.

$\begin{array}{r} 325 \\ - 14 \\ \hline \end{array}$	$\begin{array}{r} 436 \\ + 26 \\ \hline \end{array}$	$\begin{array}{r} 311 \\ - 9 \\ \hline \end{array}$	$\begin{array}{r} 436 \\ + 19 \\ \hline \end{array}$	$\begin{array}{r} 280 \\ - 19 \\ \hline \end{array}$	$\begin{array}{r} 75 \\ - 44 \\ \hline \end{array}$	$\begin{array}{r} 86 \\ + 9 \\ \hline \end{array}$
--	--	---	--	--	---	--


4) Aşağıda verilen geometrik şekillerin isimlerini yazınız.



.....




.....



.....



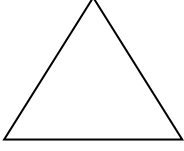
.....



.....

5) Aşağıda verilen geometrik şekillerin köşe ve kenar sayılarını yazınız.

a)



..... köşesi ve kenarı vardır.

b)




..... köşesi ve kenarı vardır.

c)




..... köşesi ve kenarı vardır.

d)



..... köşesi ve kenarı vardır.

e)



..... köşesi ve kenarı vardır.



1996