



Yakın Doğu İlkokulu

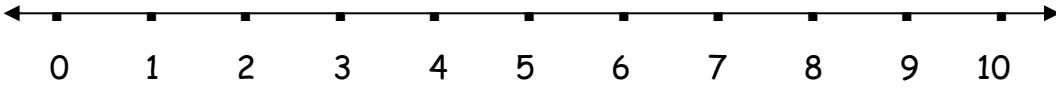
Near East Junior College

ADI SOYADI: SINIF:.....TARİH: 16.04.2020

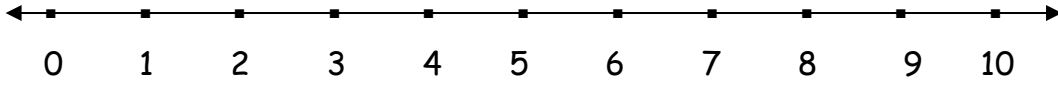
MATEMATİK ÇALIŞMA SORULARI

A)Aşağıda verilen çarpma işlemlerini sayı doğrusu üzerinde gösterelim.

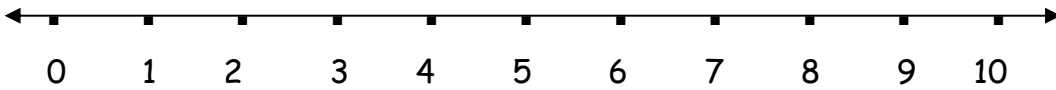
1) $3 \times 2 = \dots\dots$



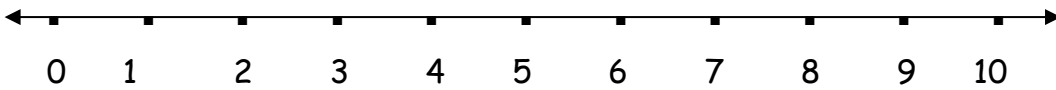
2) $8 \times 1 = \dots\dots$



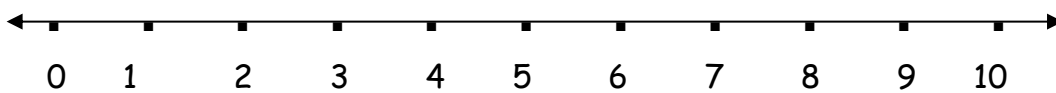
3) $2 \times 5 = \dots\dots$



4) $1 \times 3 = \dots\dots$

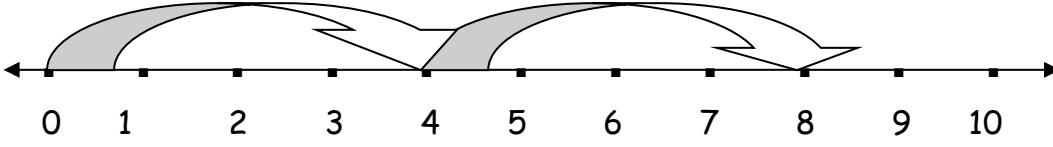


5) $3 \times 4 =$

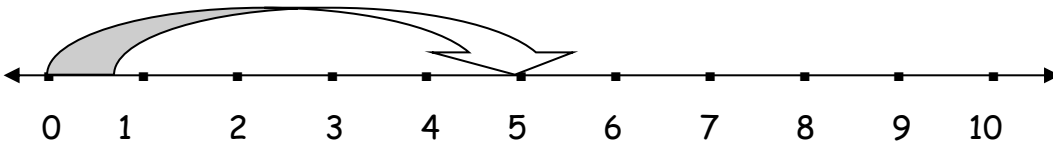


B) Sayı doğrusu üzerinde gösterilen çarpma işlemlerini bulunuz.

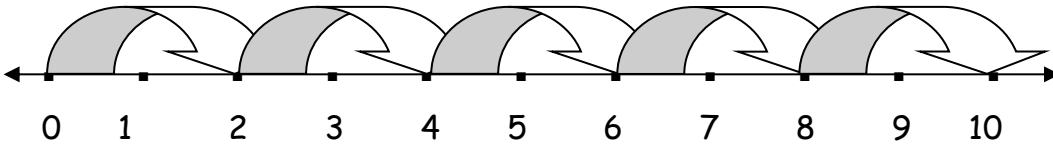
1) \times =



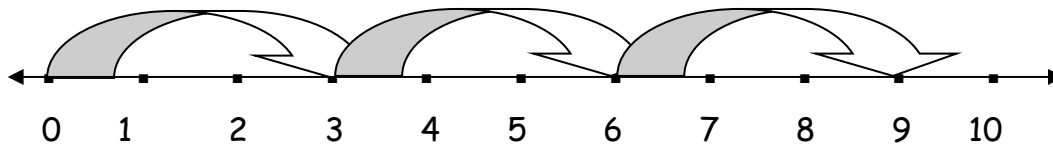
2) \times =



3) \times =



4) \times =



5) \times =

