



1996

# PRIMARY FIVE - SCIENCE WORKSHEET

2019-2020 ACADEMIC YEAR

Date: Wednesday, 29th April 2020

## MAINS ELECTRICITY

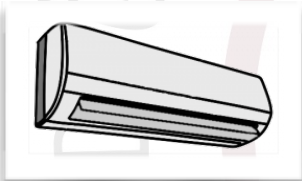
A) Write their names :

1.



-----

2.



-----

3.



-----

4.




-----


5.



-----



B) Put a cross to the appliances which don't work with electricity and put a tick to appliances which work with electricity:

1.   .....

2.   .....


3.  .....

4.  .....

5.  .....

6.  .....

7.  .....

8.  .....

9.  .....

10.  .....



**C) Answer the questions:**

1. What is mains electricity ?

.....  
.....

2. Where do we get our mains electricity from ?

.....  
.....

3. What are the common uses of electricity ?

.....  
.....

4. What happens if mains electricity flows through our body ?

.....  
.....

5. Why can electricity pass easily through water ?

.....  
.....



